



後測卷



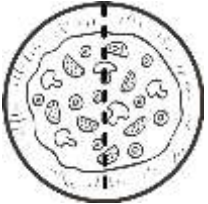
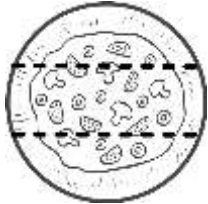

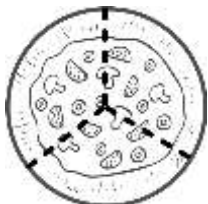
2下

十、認識分數

二年__班__號 得分


姓名_____

一、是等分分的在()中打✓。
(每題5分,共30分)


1.  ()	2.  ()
3.  ()	4.  ()
5.  ()	6.  ()

二、看圖做做看。(每題6分,共18分)


1條緞帶



小芸用掉

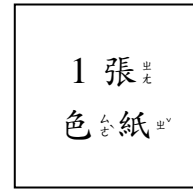


小如用掉

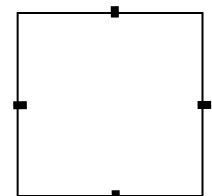
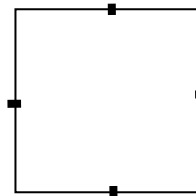


- 小芸用掉()條緞帶。
- 小如用掉()條緞帶。
- 小芸和小如,誰用掉的緞帶比較長?
(小芸, 小如)

三、先分分看,再塗塗看。
(每題8分,共16分)

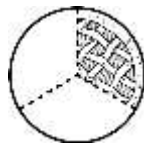
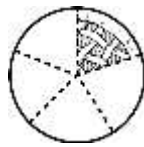
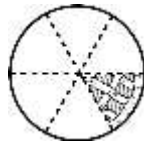

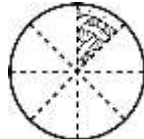
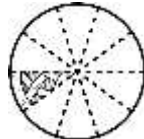


- | | |
|-----------------------------|-----------------------------|
| 1. 把 $\frac{1}{2}$ 張色紙塗上顏色。 | 2. 把 $\frac{1}{4}$ 張色紙塗上顏色。 |
|-----------------------------|-----------------------------|



四、是多少個派?用分數填看。
(每題6分,共36分)



- | | |
|--|---|
| 1. ()個派 | 2. ()個派 |
|  |  |
| 3. ()個派 | 4. ()個派 |
|  |  |
| 5. ()個派 | 6. ()個派 |
|  |  |