



後測卷



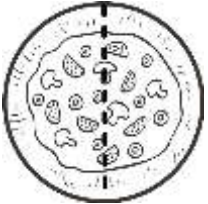
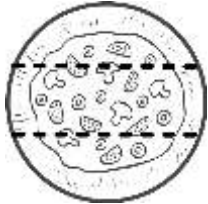

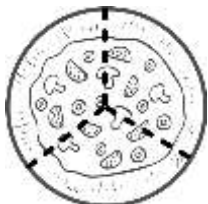
2下

十、認識分數

二年__班__號 得分


姓名_____


一、是等分分的在()中打✓。
(每題5分,共30分)


1.  ()	2.  (✓)
3.  (✓)	4.  ()
5.  (✓)	6.  (✓)

二、看圖做做看。(每題6分,共18分)

1條緞帶

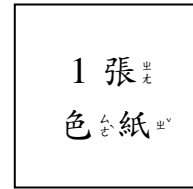


小芸用掉 

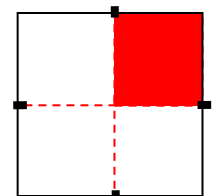
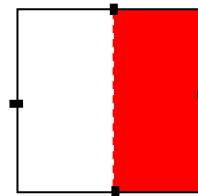
小如用掉 

- 小芸用掉($\frac{1}{8}$)條緞帶。
- 小如用掉($\frac{2}{8}$)條緞帶。
- 小芸和小如,誰用掉的緞帶比較長?
(小芸, 小如)

三、先分分看,再塗塗看。
(每題8分,共16分)(畫法僅供參考)



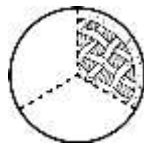
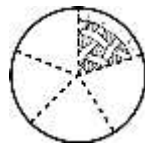
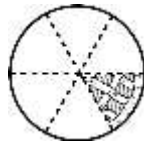
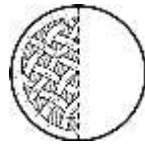
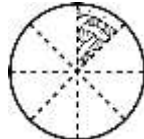
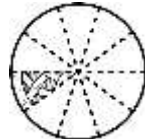
- 把 $\frac{1}{2}$ 張色紙塗上顏色。
- 把 $\frac{1}{4}$ 張色紙塗上顏色。



四、是多少個派?用分數填填看。(每題6分,共36分)

1個派



- | | |
|--|---|
| 1. ($\frac{1}{3}$) 個派 | 2. ($\frac{1}{5}$) 個派 |
|  |  |
| 3. ($\frac{1}{6}$) 個派 | 4. ($\frac{1}{2}$) 個派 |
|  |  |
| 5. ($\frac{1}{8}$) 個派 | 6. ($\frac{1}{10}$) 個派 |
|  |  |